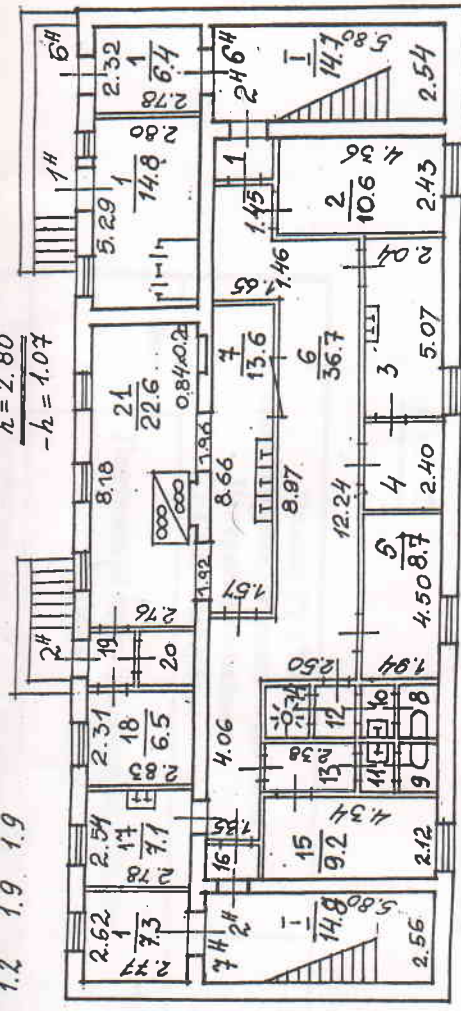


План цокольного этажа

16 19 20
1.2 1.9 1.9

$h = 2.80$
 $-h = 1.07$



1
1.5

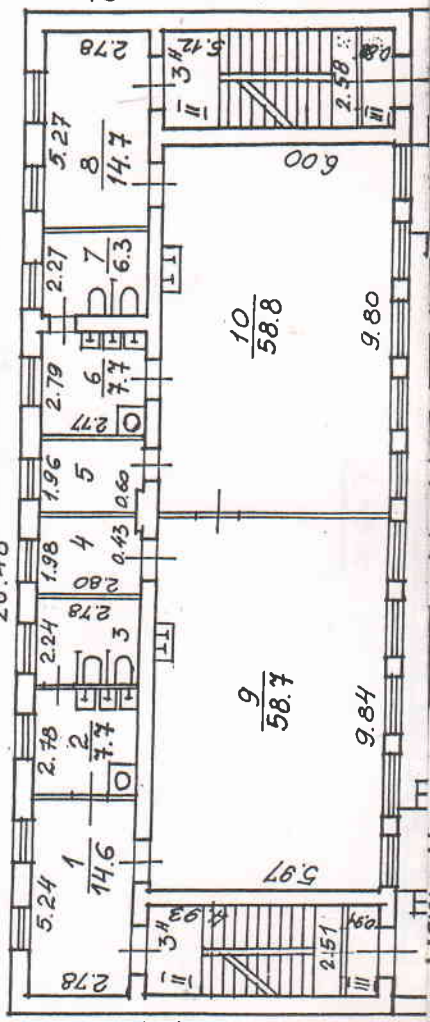
$h = 2.68$
 $-h = 1.07$

14 13 12 11 10 9 8
1.7 2.8 1.3 1.0 1.2 1.0 1.2

4 3
4.8 10.3

План 1 этажа

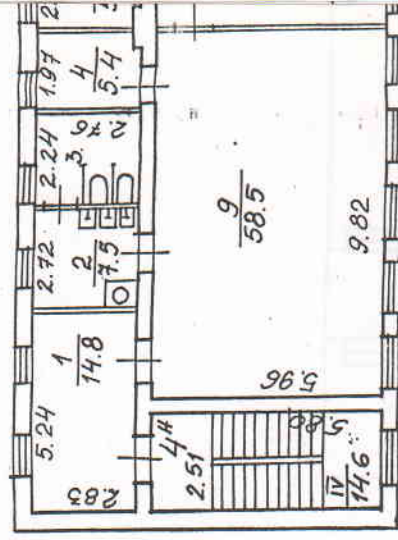
26.48



3 4 5
6.2 5.4 5.3

II 13.2
III 2.3

План 2 э



План 3

